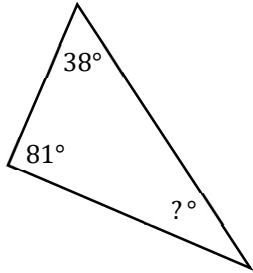


Math Worksheets

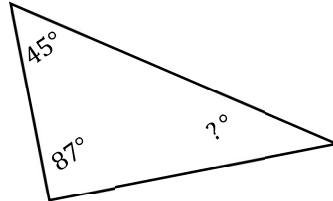
Triangles

 Find the measure of the unknown angle in each triangle.

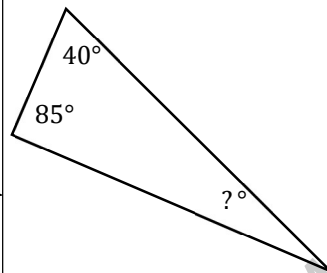
1)



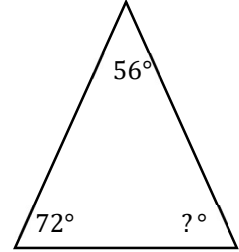
2)



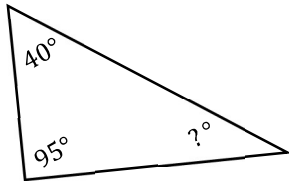
3)



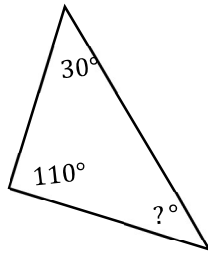
4)



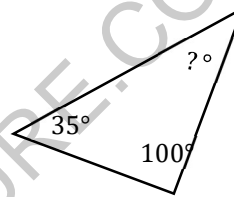
5)



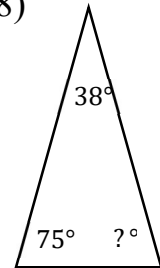
6)



7)

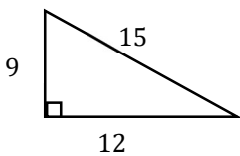


8)

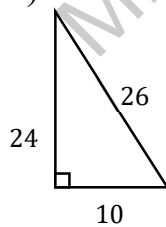


 Find area of each triangle.

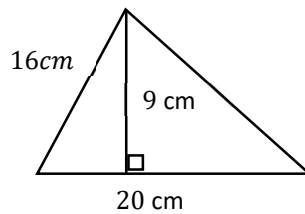
9)



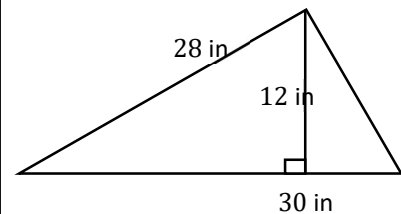
10)



11)



12)



Answers of Worksheets

Triangles

1) 60°

2) 48°

3) 55°

4) 52°

5) 45°

6) 40°

7) 45°

8) 67°

9) *54 square unites*

10) *120 square unites*

11) *90 square unites*

12) *180 square unites*

MEGALECTURE.COM