
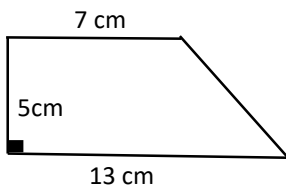


Math Worksheets

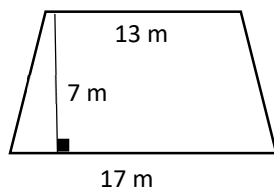
Trapezoids

 Find the area of each trapezoid.

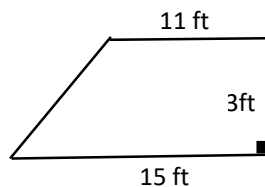
1)



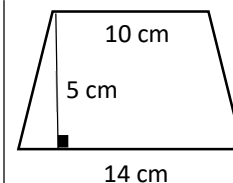
2)



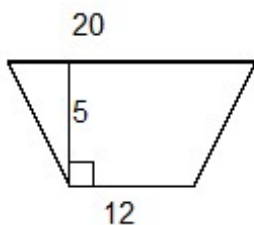
3)



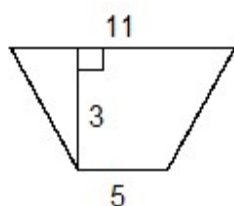
4)



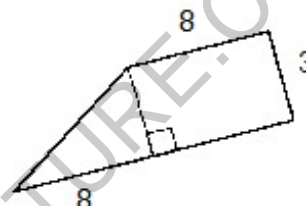
5)



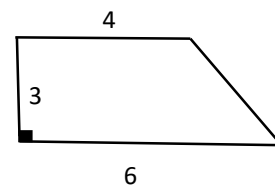
6)



7)



8)



 Calculate.

- 1) A trapezoid has an area of 45 cm^2 and its height is 5 cm and one base is 5 cm. What is the other base length? _____
- 2) If a trapezoid has an area of 99 ft^2 and the lengths of the bases are 8 ft and 10 ft, find the height? _____
- 3) If a trapezoid has an area of 126 m^2 and its height is 14 m and one base is 6 m, find the other base length? _____
- 4) The area of a trapezoid is 440 ft^2 and its height is 22 ft. If one base of the trapezoid is 15 ft, what is the other base length? _____

Answers of Worksheets

Trapezoids

1) 50 cm^2

4) 60 cm^2

7) 36

2) 105 m^2

5) 80

8) 15

3) 39 ft^2

6) 24

Calculate

1) 13 cm

2) 11 ft

3) 12 m

4) 25 ft

MEGALECTURE.COM