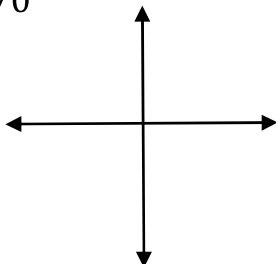


Math Worksheets

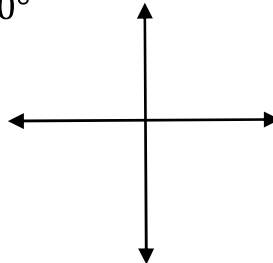
**Sketch Each Angle in Standard Position**

 Draw each angle with the given measure in standard position.

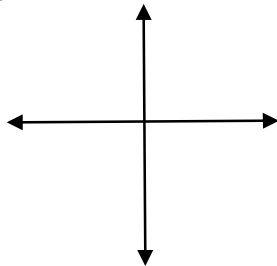
1)  $-570^\circ$



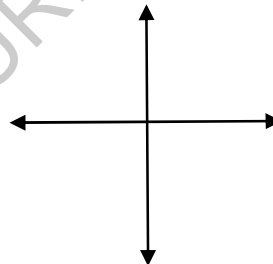
4)  $-690^\circ$



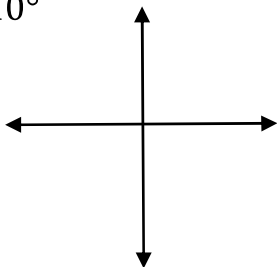
2)  $750^\circ$



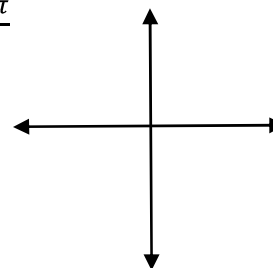
5)  $\frac{13\pi}{6}$



3)  $1,110^\circ$



6)  $-\frac{11\pi}{6}$

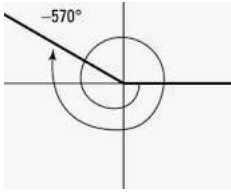


MEGALECTURE.COM

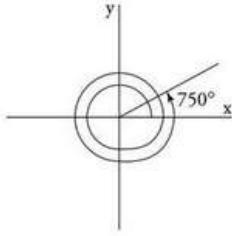
## Answers of Worksheets

Sketch Each Angle in Standard Position

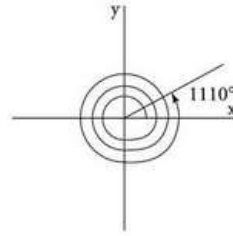
1)  $-570^\circ$



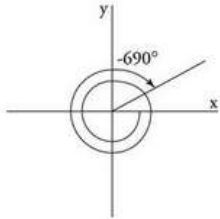
2)  $750^\circ$



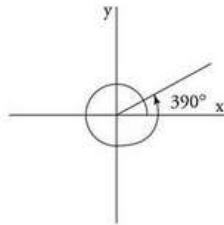
3)  $1,110^\circ$



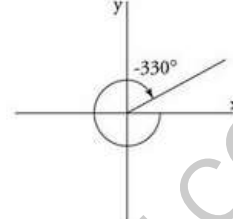
4)  $-690^\circ$



5)  $\frac{13\pi}{6} = 390^\circ$



6)  $-\frac{11\pi}{6} = -330^\circ$



MEGALECTURE.COM