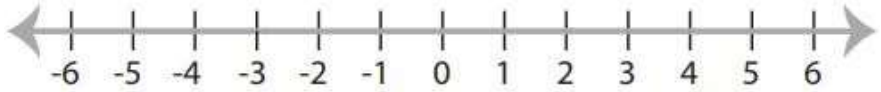


## Math Worksheets

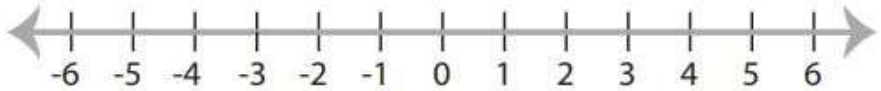
## One-Step Inequalities

 Find the answer for each inequality and graph it.

1)  $x + 4 \geq 4$



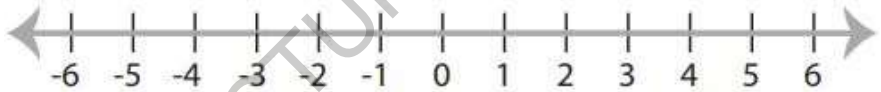
2)  $x - 5 \leq 2$



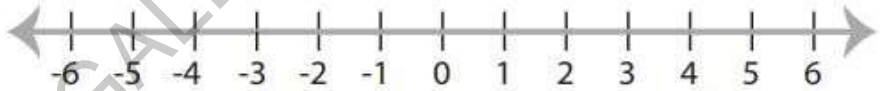
3)  $5x > 35$



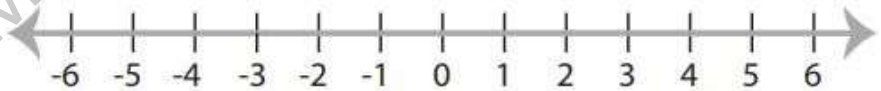
4)  $9 + x \leq 11$



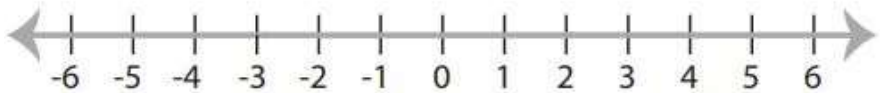
5)  $x - 5 < -9$



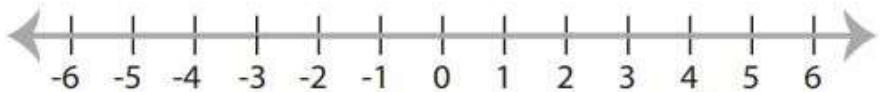
6)  $9x \geq 72$



7)  $9x \leq 27$



8)  $x + 19 > 16$



# Answers of Worksheets

## One-Step Inequalities

1)



2)



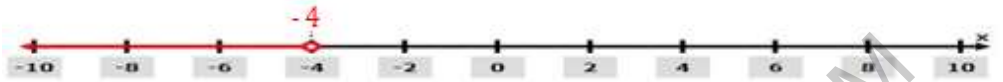
3)



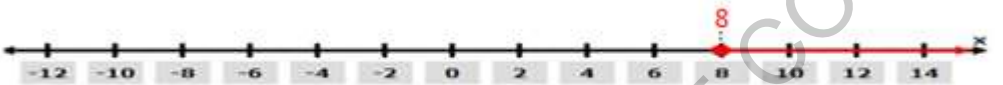
4)




5)



6)



7)



8)



MEGALECTURE.COM