
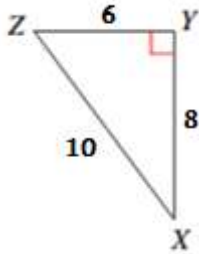


Math Worksheets

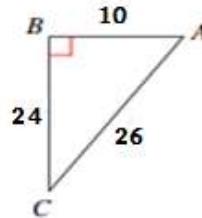
Missing Sides and Angles of a Right Triangle

 Find the value of each trigonometric ratio as fractions in their simplest form.

1) $\cot x$

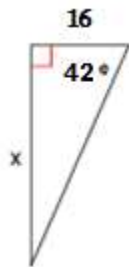


2) $\cos A$

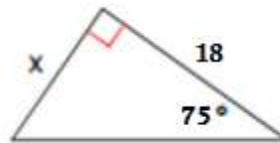


 Find the missing sides. Round answers to the nearest tenth.

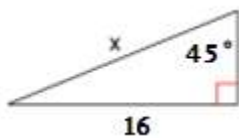
3)



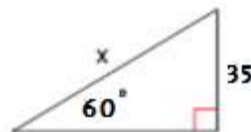
4)



5)



6)



Answers of Worksheets

Missing Sides and Angles of a Right Triangle

1) $\frac{4}{3}$

2) $\frac{5}{13}$

3) 14.4

4) 67.2

5) 22.6

6) 40.4

MEGALECTURE.COM