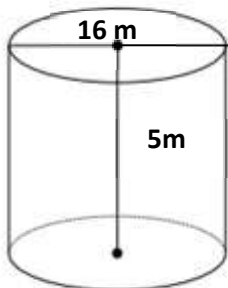


Math Worksheets

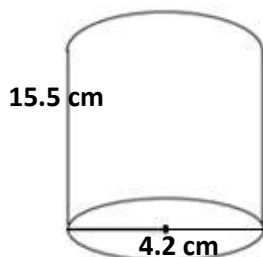
Cylinder

 Find the volume of each Cylinder. Round your answer to the nearest tenth. ($\pi = 3.14$)

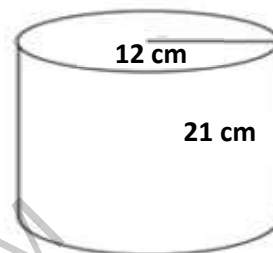
1)



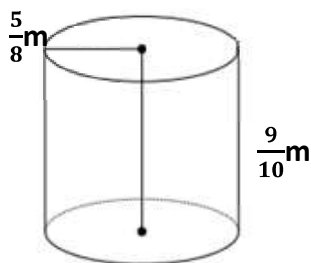
2)



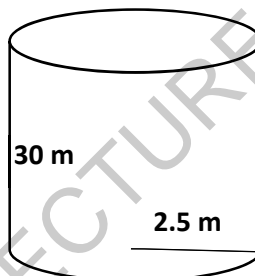
3)



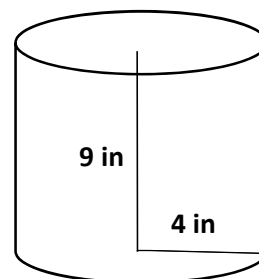
4)



5)

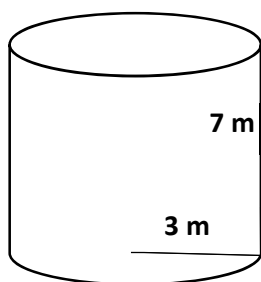


6)

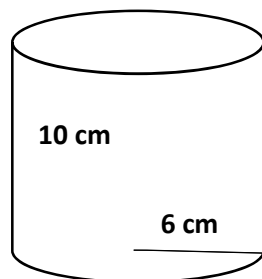


 Find the surface area of each Cylinder. ($\pi = 3.14$)

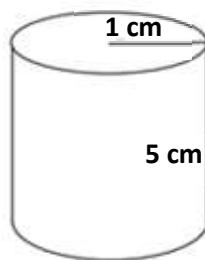
7)



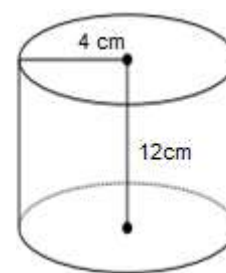
8)



9)



10)



Answers of Worksheets

Cylinder

1) $1,004.8 \text{ m}^3$

2) 214.6 cm^3

3) $9,495.4 \text{ cm}^3$

4) 1.1 m^3

5) 588.8 m^3

6) 452.2 in^3

7) 188.4 m^2

8) 602.9 cm^2

9) 37.7 cm^2

10) 401.9 m^2

MEGALECTURE.COM