
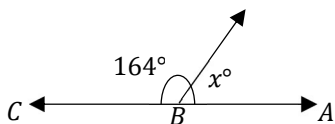


Math Worksheets

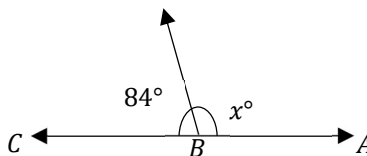
Angles

 What is the value of x in the following figures?

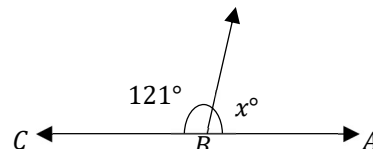
1)



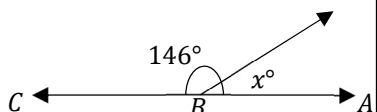
2)



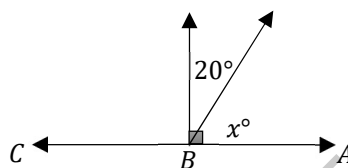
3)



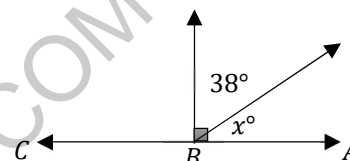
4)



5)



6)



 Calculate.

7) Two supplement angles have equal measures. What is the measure of each angle?

8) The measure of an angle is seven fifth the measure of its supplement. What is the measure of the angle? _____

9) Two angles are complementary and the measure of one angle is 24 less than the other. What is the measure of the smaller angle? _____

10) Two angles are complementary. The measure of one angle is one fifth the measure of the other. What is the measure of the bigger angle?

11) Two supplementary angles are given. The measure of one angle is 40° less than the measure of the other. What does the smaller angle measure?

Answers of Worksheets

Angles

1) 16°

2) 96°

3) 59°

4) 34°

5) 70°

6) 52°

7) 90°

8) 75°

9) 33°

10) 75°

11) 70°

MEGALECTURE.COM