



Cambridge International AS & A Level

CANDIDATE
NAME

--

CENTRE
NUMBER

--	--	--	--	--

CANDIDATE
NUMBER

--	--	--	--



MATHEMATICS

9709/41

Paper 4 Mechanics

May/June 2021

1 hour 15 minutes

You must answer on the question paper.

You will need: List of formulae (MF19)

INSTRUCTIONS

- Answer **all** questions.
- Use a black or dark blue pen. You may use an HB pencil for any diagrams or graphs.
- Write your name, centre number and candidate number in the boxes at the top of the page.
- Write your answer to each question in the space provided.
- Do **not** use an erasable pen or correction fluid.
- Do **not** write on any bar codes.
- If additional space is needed, you should use the lined page at the end of this booklet; the question number or numbers must be clearly shown.
- You should use a calculator where appropriate.
- You must show all necessary working clearly; no marks will be given for unsupported answers from a calculator.
- Give non-exact numerical answers correct to 3 significant figures, or 1 decimal place for angles in degrees, unless a different level of accuracy is specified in the question.
- Where a numerical value for the acceleration due to gravity (g) is needed, use 10 m s^{-2} .

INFORMATION

- The total mark for this paper is 50.
- The number of marks for each question or part question is shown in brackets [].

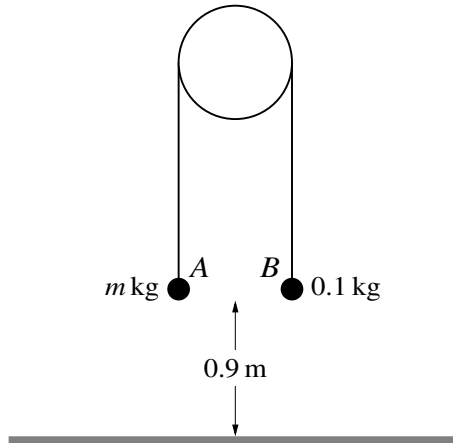
This document has **12** pages.

- 1** A winch operates by means of a force applied by a rope. The winch is used to pull a load of mass 50 kg up a line of greatest slope of a plane inclined at 60° to the horizontal. The winch pulls the load a distance of 5 m up the plane at constant speed. There is a constant resistance to motion of 100 N.

Find the work done by the winch.

[3]

.....
.....
.....
.....
.....
.....
.....
.....
.....
.....
.....
.....
.....
.....
.....
.....
.....
.....
.....
.....
.....
.....
.....
.....
.....
.....
.....
.....
.....
.....
.....
.....
.....
.....
.....
.....
.....
.....
.....
.....
.....
.....



Two particles A and B have masses m kg and 0.1 kg respectively, where $m > 0.1$. The particles are attached to the ends of a light inextensible string. The string passes over a fixed smooth pulley and the particles hang vertically below it. Both particles are at a height of 0.9 m above horizontal ground (see diagram). The system is released from rest, and while both particles are in motion the tension in the string is 1.5 N. Particle B does not reach the pulley.

(a) Find m . [4]

.....

.....

.....

.....

.....

.....

.....

.....

.....

(b) Find the speed at which A reaches the ground. [2]

.....

.....

.....

.....

.....

.....

3 Three particles P , Q and R , of masses 0.1 kg, 0.2 kg and 0.5 kg respectively, are at rest in a straight line on a smooth horizontal plane. Particle P is projected towards Q at a speed of 5 m s^{-1} . After P and Q collide, P rebounds with speed 1 m s^{-1} .

(a) Find the speed of Q immediately after the collision with P . [3]

.....

.....

.....

.....

.....

.....

.....

.....

.....

.....

.....

.....

.....

.....

.....

.....

.....

.....

.....

.....

.....

Q now collides with R . Immediately after the collision with Q , R begins to move with speed $V \text{ m s}^{-1}$.

(b) Given that there is no subsequent collision between P and Q , find the greatest possible value of V . [3]

.....

.....

.....

.....

.....

.....

.....

.....

.....

.....

.....

.....

.....

.....

.....

.....

.....

.....

.....

.....

.....

.....

- 4 Two cyclists, Isabella and Maria, are having a race. They both travel along a straight road with constant acceleration, starting from rest at point A.

Isabella accelerates for 5 s at a constant rate $a \text{ m s}^{-2}$. She then travels at the constant speed she has reached for 10 s, before decelerating to rest at a constant rate over a period of 5 s.

Maria accelerates at a constant rate, reaching a speed of 5 m s^{-1} in a distance of 27.5 m. She then maintains this speed for a period of 10 s, before decelerating to rest at a constant rate over a period of 5 s.

- (a) Given that $a = 1.1$, find which cyclist travels further. [5]

.....
.....
.....
.....
.....
.....
.....
.....
.....
.....
.....
.....
.....
.....
.....
.....
.....
.....
.....
.....
.....

- (b) Find the value of a for which the two cyclists travel the same distance. [2]

.....
.....
.....
.....
.....
.....
.....
.....
.....
.....
.....

- (b) Find the distance travelled from A to the point at which the acceleration of the particle is again zero. [5]

.....

.....

.....

.....

.....

.....

.....

.....

.....

.....

.....

.....

.....

.....

.....

.....

.....

.....

.....

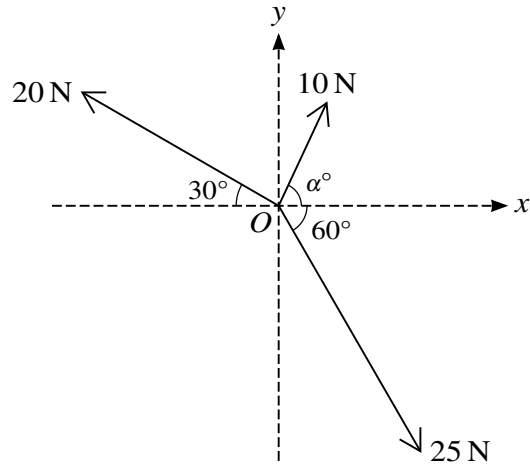
.....

.....

.....

.....

.....



Three coplanar forces of magnitudes 10 N, 25 N and 20 N act at a point O in the directions shown in the diagram.

- (a) Given that the component of the resultant force in the x -direction is zero, find α , and hence find the magnitude of the resultant force. [4]

.....

.....

.....

.....

.....

.....

.....

.....

.....

.....

.....

.....

.....

.....

.....

.....

.....

.....

.....

.....

.....

.....

.....

.....

.....

.....

.....

.....

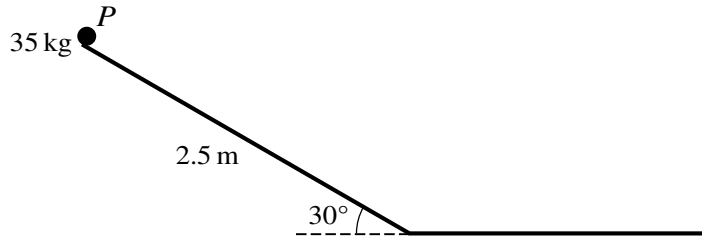
.....

.....

.....

.....

7



A slide in a playground descends at a constant angle of 30° for 2.5 m . It then has a horizontal section in the same vertical plane as the sloping section. A child of mass 35 kg , modelled as a particle P , starts from rest at the top of the slide and slides straight down the sloping section. She then continues along the horizontal section until she comes to rest (see diagram). There is no instantaneous change in speed when the child goes from the sloping section to the horizontal section.

The child experiences a resistance force on the horizontal section of the slide, and the work done against the resistance force on the horizontal section of the slide is 250 J per metre.

(a) It is given that the sloping section of the slide is smooth.

(i) Find the speed of the child when she reaches the bottom of the sloping section. [3]

.....

.....

.....

.....

.....

.....

.....

.....

(ii) Find the distance that the child travels along the horizontal section of the slide before she comes to rest. [2]

.....

.....

.....

.....

.....

.....

.....

