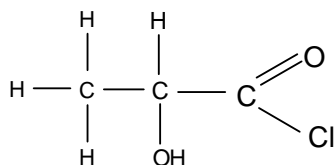


MEGA LECTURE

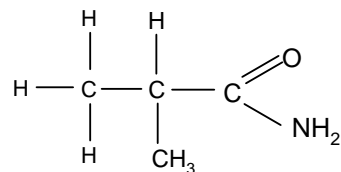
Topic 17 Exercise 1 – Naming organic compounds

Name the following organic compounds:

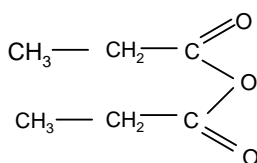
1.



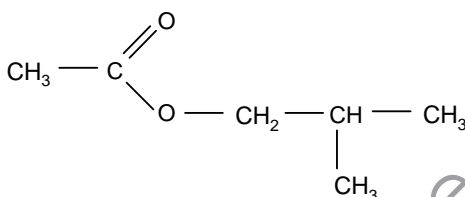
2.



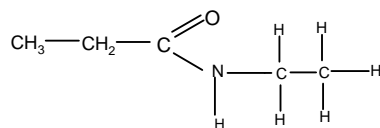
3.



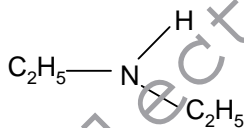
4.



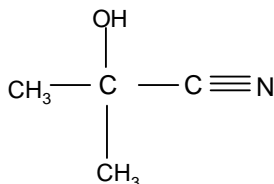
5.



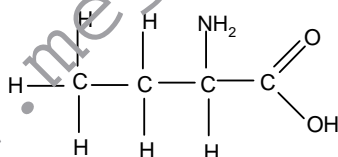
6.



7.



8.



Draw displayed formulae for the following compounds:

9. butanoyl chloride
10. 2-hydroxyethanamide
11. ethanoic butanoic anhydride
12. ethyl 2-hydroxypropanoate
13. N-methylbutanamide
14. N-methyl, N-ethyl, butylamine
15. sodium 2-hydroxyethanoate
16. ethyldimethylammonium bromide