



Cambridge International Examinations  
Cambridge Ordinary Level


CANDIDATE  
NAME

CENTRE  
NUMBER

--	--	--	--	--

CANDIDATE  
NUMBER

--	--	--	--



**BIOLOGY**

**5090/21**

Paper 2 Theory

**May/June 2017**

**1 hour 45 minutes**

Candidates answer on the Question Paper.

No Additional Materials are required.

**READ THESE INSTRUCTIONS FIRST**

Write your Centre number, candidate number and name on all the work you hand in.  
Write in dark blue or black pen.  
You may use an HB pencil for any diagrams or graphs.  
Do not use staples, paper clips, glue or correction fluid.  
DO **NOT** WRITE IN ANY BARCODES.

**Section A**

Answer **all** questions in this section.  
Write your answers in the spaces provided on the Question Paper.

**Section B**

Answer **both** questions in this section.  
Write your answers in the spaces provided on the Question Paper.

**Section C**

Answer **either** question 8 **or** question 9.  
Write your answers in the spaces provided on the Question Paper.

You are advised to spend no longer than one hour on Section A.

Electronic calculators may be used.  
You may lose marks if you do not show your working or if you do not use appropriate units.

At the end of the examination, fasten all your work securely together.  
The number of marks is given in brackets [ ] at the end of each question or part question.

This document consists of **15** printed pages and **1** blank page.



Section A

Answer **all** questions in this section.

1 *Spirulina* is classified in the group bacteria. *Spirulina* is green in colour and is able to synthesise its own food.

(a) List **three** characteristics of bacteria.

1 .....

2 .....

3 .....

[3]

(b) (i) Suggest the name of the chemical that gives *Spirulina* its green colour.

.....

[1]

(ii) Write, in words or symbols, the equation for the process by which *Spirulina* synthesises its own food.

..... → .....

[2]

(c) *Spirulina* can be eaten by humans.

The United Nations World Health Organization (WHO) made the following statement about *Spirulina*:

*'For WHO Spirulina represents an interesting food for multiple reasons. Rich in iron and protein, it can be given to children without any risk. We at WHO consider it to be a very suitable food.'*

Use your knowledge of animal nutrition to suggest and explain why WHO considers *Spirulina* to be a 'very suitable food'.

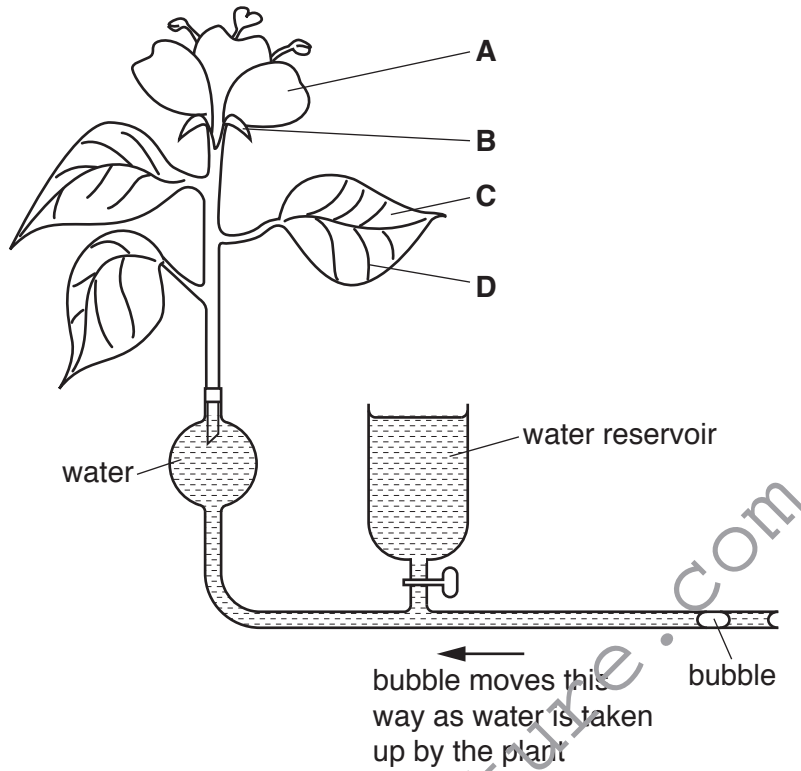
.....  
.....  
.....  
.....  
.....  
.....  
.....  
.....  
.....  
.....

[4]

[Total: 10]

**MEGA LECTURE**

2 A potometer is used to measure water uptake by a plant. Fig. 2.1 shows the stem and flower of a plant in a potometer. As water is taken up, the bubble moves in the direction shown.



**Fig. 2.1**

(a) Name the parts **A**, **B**, **C** and **D** in Fig. 2.1.

- A** .....
- B** .....
- C** .....
- D** .....

[4]

(b) Describe the pathway taken by water as it moves from the potometer, through the plant stem and into the surrounding air.

.....  
.....  
.....  
.....  
.....  
.....[3]



- (c) (i) In an experiment, the bubble moved a distance of 60 mm in 10 minutes.  
Calculate the average rate at which the bubble moved in mm per min.

..... mm per min  
[1]

- (ii) The experiment was repeated in an area of lower light intensity.

Predict and explain what would happen to the rate at which the bubble moved.

prediction.....

.....

explanation.....

.....

.....

.....[3]

[Total: 11]





- (c) (i) Oestrogen is an example of a type of chemical substance, produced by a gland, that alters the activity of one or more specific target organs before being destroyed by organ X. Name this type of chemical substance.

.....

[1]

- (ii) With reference to **oestrogen**, complete Table 3.1.

**Table 3.1**

gland where produced	
target organ	
effect on target organ	

[3]

[Total: 11]

4 Fig. 4.1 shows a Bengal tiger.



Fig. 4.1

Fur colour in the Bengal tiger is controlled by a single gene. The dominant allele of the gene results in orange fur. A single change in this gene produces a recessive allele, which results in white fur in tigers with the homozygous recessive genotype.

(a) (i) Define the term *gene*.

.....  
.....  
.....  
.....[3]

(ii) State the term used to describe a change in a gene.

..... [1]



(b) Using the letters **T** (orange) and **t** (white) to represent the alleles that control fur colour, draw a labelled genetic diagram to show how two tigers with orange fur may give rise to offspring with white fur.

[5]

(c) Bengal tigers have dark stripes on their fur.

Suggest why each of the following is true for the pattern of dark stripes:

it is **not** affected by whether the fur is orange or white

.....  
.....  
.....

it is unique to each individual

.....  
.....  
.....[3]

[Total: 12]





5 The statements **E** to **K** relate to the process of reproduction.

- E** produces genetically identical offspring
- F** produces more individuals of the same species
- G** involves only one parent
- H** involves fusion of nuclei
- I** requires gametes
- J** forms a diploid zygote
- K** involves only cell division by mitosis

Table 5.1 shows a comparison of sexual and asexual reproduction.

**Table 5.1**

sexual reproduction only	asexual reproduction only	both sexual and asexual reproduction
	<b>E</b>	

Complete Table 5.1 by writing each letter in the correct box to match it to sexual reproduction only, asexual reproduction only, or to both.

The first letter has been written in the correct box for you. Use each letter **once** only. [6]

[Total: 6]

**Section B**

Answer **both** questions in this section.

6 (a) Describe the role of the cilia in the trachea.

.....

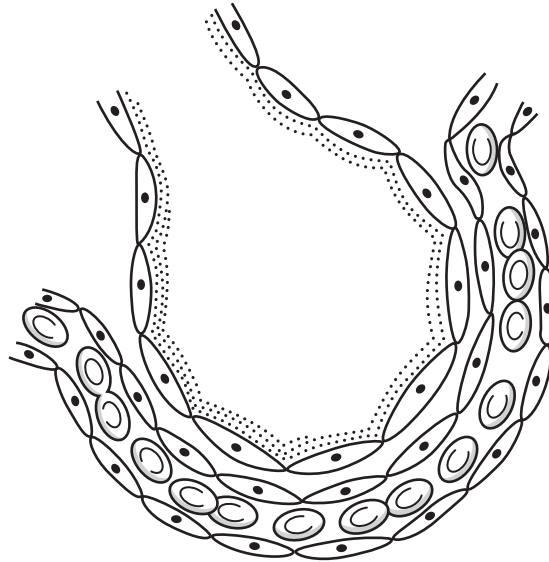
.....

.....

.....

.....[3]

(b) Fig. 6.1 shows components of the human gas exchange surface and an associated blood vessel.



**Fig. 6.1**









**Section C**

Answer **either** question 8 **or** question 9.

- 8 (a) With reference to **named** components, describe how the structure of one animal cell (for example from fresh liver) would appear different from a plant cell (for example from an onion epidermis).

.....  
.....  
.....  
.....  
.....  
.....  
.....  
.....  
.....[4]

- (b) State the relationship between structure and function for **both** of the following:

xylem vessels

.....  
.....  
.....  
.....

red blood cells

.....  
.....  
.....  
.....[6]

[Total: 10]



9 Compare each of the following processes:

(a) aerobic respiration and anaerobic respiration

.....  
.....  
.....  
.....  
.....[3]

(b) anaerobic respiration in muscles and anaerobic respiration in yeast

.....  
.....  
.....  
.....  
.....[3]

(c) diffusion and active transport

.....  
.....  
.....  
.....  
.....  
.....[4]

[Total: 10]

www.megalecture.com



BLANK PAGE

---

Permission to reproduce items where third-party owned material protected by copyright is included has been sought and cleared where possible. Every reasonable effort has been made by the publisher (UCLES) to trace copyright holders, but if any items requiring clearance have unwittingly been included, the publisher will be pleased to make amends at the earliest possible opportunity.

To avoid the issue of disclosure of answer-related information to candidates, all copyright acknowledgements are reproduced online in the Cambridge International Examinations Copyright Acknowledgements Booklet. This is produced for each series of examinations and is freely available to download at [www.cie.org.uk](http://www.cie.org.uk) after the live examination series.

Cambridge International Examinations is part of the Cambridge Assessment Group. Cambridge Assessment is the brand name of University of Cambridge Local Examinations Syndicate (UCLES), which is itself a department of the University of Cambridge.

© UCLES

**WWW.MEGALECTURE.COM**  
[www.youtube.com/megalecture](http://www.youtube.com/megalecture)