

Dynamics - 2018

1. 9702/11/M/J/18/No.8

The momentum of a car of mass m increases from p_1 to p_2 .

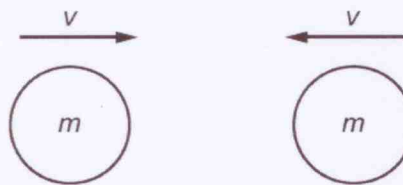
What is the increase in the kinetic energy of the car?

- A $\frac{p_2^2 - p_1^2}{2m}$
 B $\frac{(p_2 - p_1)^2}{2m}$
 C $\frac{p_2 - p_1}{2m}$
 D $\frac{p_1 - p_2}{2m}$

$$\begin{aligned}
 K &= E = \frac{1}{2}mv^2 \\
 \Delta E_k &= \frac{1}{2}mv^2 - \frac{1}{2}mu^2 \\
 &= \frac{1}{2}m(v^2 - u^2) \times \frac{m}{m} \\
 &= \frac{m^2(v^2 - u^2)}{2m} \\
 &= \frac{m^2v^2 - m^2u^2}{2m} \\
 &= \frac{p_2^2 - p_1^2}{2m}
 \end{aligned}$$

2. 9702/11/M/J/18/No.9

Two similar spheres, each of mass m and travelling with speed v , are moving towards each other.



The spheres have a head-on elastic collision.

Which statement is correct?

- A The spheres stick together on impact.

 B The total kinetic energy after impact is mv^2 .

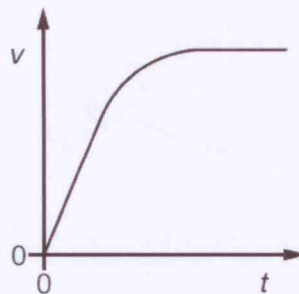
 C The total kinetic energy before impact is zero.

 D The total momentum before impact is $2mv$.

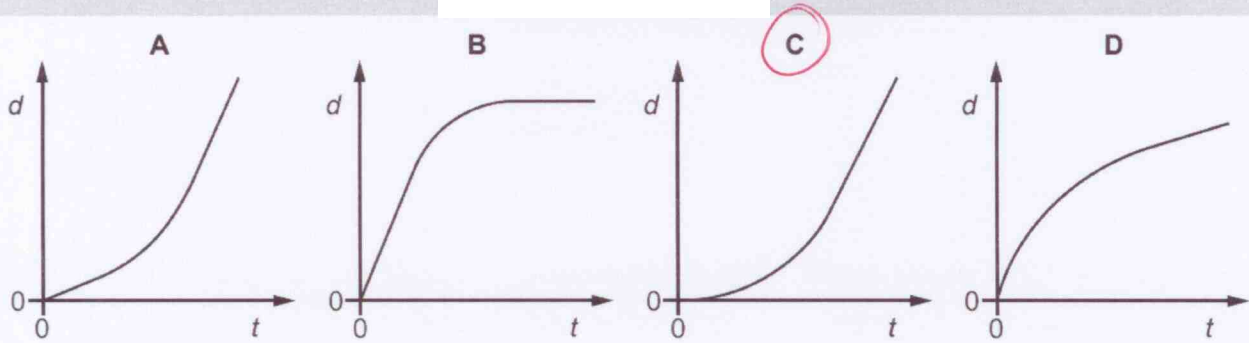
$$\begin{aligned}
 E_k &= \frac{1}{2}mv^2 + \frac{1}{2}mv^2 \\
 &= mv^2
 \end{aligned}$$

3. 9702/12/M/J/18/No.7

A sky-diver falls vertically from a helicopter and reaches constant (terminal) velocity. The graph shows the variation with time t of the speed v of the sky-diver.



Which graph shows the variation with time t of the distance d fallen by the sky-diver?



4. 9702/12/M/J/18/No.8

A tennis ball of mass 55g is travelling horizontally with a speed of 30 ms^{-1} . The ball makes contact with a wall before rebouncing in the horizontal direction with a speed of 20 ms^{-1} . The ball is in contact with the wall for a time of $5.0 \times 10^{-3} \text{ s}$.


What is the average force exerted on the wall by the ball?

- A 110N B 220N C 330N **D 550N**

$$\begin{aligned}
 F &= \frac{\Delta P}{\Delta t} \\
 &= \frac{-mv - m u}{\Delta t} \\
 &= \frac{0.05 \text{ J}(-20 - 30)}{5.0 \times 10^{-3}} \\
 &= \underline{\underline{550 \text{ N}}}
 \end{aligned}$$

5. 9702/12/M/J/18/No.9

An elastic collision occurs between two bodies X and Y. The mass of body X is m and the mass of body Y is $4m$. Body X travels at speed v before the collision and speed $\frac{3v}{5}$ in the opposite direction after the collision. Body Y is stationary before the collision.



What is the kinetic energy of body Y after the collision?

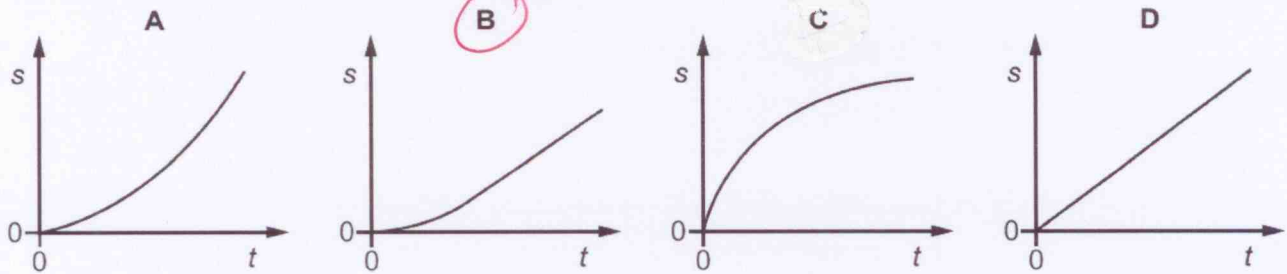
- A $\frac{8}{10} mv^2$ B $\frac{34}{50} mv^2$ **C $\frac{16}{50} mv^2$** D $\frac{1}{5} mv^2$

$$\begin{aligned}
 \frac{1}{2} mv^2 + 0 &= \frac{9}{50} mv^2 + E_{ky} \\
 E_{ky} &= \left(\frac{1}{2} - \frac{9}{50} \right) mv^2 \\
 &= \underline{\underline{\frac{16}{50} mv^2}}
 \end{aligned}$$

6. 9702/13/M/J/18/No.8

A sky-diver falls from a stationary balloon at time $t = 0$. As the sky-diver falls, her speed and the air resistance increase until the force of the air resistance is equal to her weight.

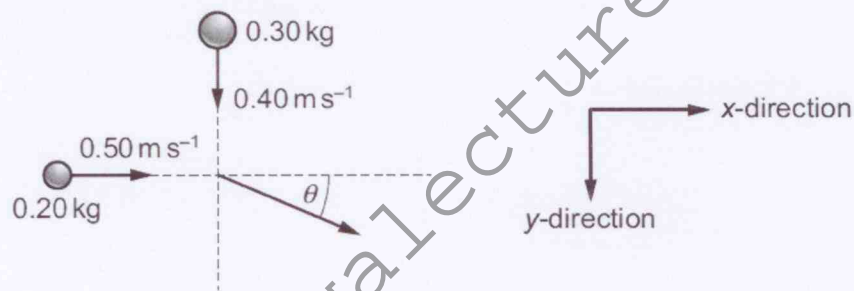
Which graph best shows the variation with time t of the displacement s for the motion of the sky-diver?



7. 9702/13/M/J/18/No.9

A ball of mass 0.20 kg , travelling in the x -direction at a speed of 0.50 ms^{-1} , collides with a ball of mass 0.30 kg travelling in the y -direction at a speed of 0.40 ms^{-1} .

The two balls stick together after the collision, travelling at an angle θ to the x -direction.



What is the value of θ ?

- A 39° B 40° **C 50°** D 51°

before collision

p in x direction
 $0.2 \times 0.5 = 0.1 \text{ kgms}^{-1}$

p in y direction
 $0.3 \times 0.4 = 0.12 \text{ kgms}^{-1}$

after collision

p in x direction
 $(0.2 + 0.3)v \cos \theta = 0.1v \cos \theta$

p in y direction
 $(0.2 + 0.3)v \sin \theta = 0.12v \sin \theta$

$$\left\{ \begin{array}{l} 0.1 = 0.5v \cos \theta \\ v = \frac{0.2}{\cos \theta} \end{array} \right. \quad \left\{ \begin{array}{l} \frac{\sin \theta}{\cos \theta} = \tan \theta \\ \tan \theta = \frac{0.24}{0.2} \\ \tan \theta = 1.2 \\ \theta = \tan^{-1}(1.2) \\ = 50.19^\circ \\ \approx 50^\circ \end{array} \right.$$

$$\left\{ \begin{array}{l} \frac{0.12}{\cos \theta} = \frac{0.24}{\sin \theta} \\ \frac{\sin \theta}{\cos \theta} = \frac{0.24}{0.12} \end{array} \right.$$

8. 9702/12/F/M/18/No.10

Steel pellets, each with a mass of 0.60g, fall vertically onto a horizontal plate at a rate of 100 pellets per minute. They strike the plate with a velocity of 5.0 ms^{-1} and rebound with a velocity of 4.0 ms^{-1} .

What is the average force exerted on the plate by the pellets?

- A 0.0010 N B 0.0054 N **C 0.0090 N** D 0.54 N

↑ change direction

$$\begin{aligned} F &= \frac{mv - mu}{\Delta t} \\ &= \frac{m(v - u)}{\Delta t} \\ &= \frac{m(-4 - 5)}{\frac{60 \text{ s}}{100}} \\ &= \frac{0.0006(-4 - 5)}{0.6} \\ &= \frac{0.009 \text{ N} \times 100}{100} \\ &= \underline{\underline{0.009 \text{ N}}} \end{aligned}$$